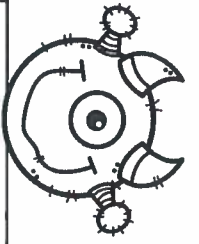



Answer Key




Money Task Cards



A 37¢	B True.	C 60¢	D 38¢
E 75¢	F Answers will vary	G 49¢	H Answers will vary
I 58¢	J Answers will vary	K 96¢	L Answers will vary

NAME:

* Answer Key * Make It Match!



Directions: Color in the coins to equal the number shown. Use the least number of coins.

56¢	
70¢	
47¢	
66¢	
82¢	
51¢	
67¢	
46¢	

Mystery Picture #7

Answer Key

1	2	3	4	5	6	7	8	9	10
11	12	13	14	15	16	17	18	19	20
21	22	23	24	25	26	27	28	29	30
31	32	33	34	35	36	37	38	39	40
41	42	43	44	45	46	47	48	49	50
51	52	53	54	55	56	57	58	59	60
61	62	63	64	65	66	67	68	69	70
71	72	73	74	75	76	77	78	79	80
81	82	83	84	85	86	87	88	89	90
91	92	93	94	95	96	97	98	99	100

My mystery picture is a dinosaur.










Name _____

Answer Key

Counting Money






























Write the amount in each box.

 <p>55¢</p>	 <p>41¢</p>	 <p>75¢</p>
 <p>45¢</p>	 <p>30¢</p>	 <p>51¢</p>
 <p>85¢</p>	 <p>27¢</p>	 <p>40¢</p>

Mystery Picture #7

Use a green crayon to color your mystery picture.

 <u>29¢</u>	 <u>70¢</u>
 <u>36¢</u>	 <u>63¢</u>
 <u>78¢</u>	 <u>57¢</u>
 <u>66¢</u>	 <u>46¢</u>
 <u>75¢</u>	 <u>68¢</u>
 <u>41¢</u>	 <u>79¢</u>
 <u>64¢</u>	 <u>52¢</u>
 <u>47¢</u>	 <u>65¢</u>
 <u>45¢</u>	 <u>59¢</u>
 <u>56¢</u>	 <u>37¢</u>
 <u>69¢</u>	 <u>67¢</u>
 <u>74¢</u>	 <u>55¢</u>
 <u>48¢</u>	 <u>42¢</u>
 <u>58¢</u>	XXXXXXXXXXXXXXXXXX

Counting Money

Adam has 4 one dollar bills, 5 quarters, 1 nickel and 1 penny.
How much money does he have?

(Draw a picture to find your answer.)

answer: \$5.31

Grace has 1 five dollar bill, 3 one dollar bills, 4 quarters, 5 dimes,
and 3 pennies. How much money does she have?

(Draw a picture to find your answer.)

answer: \$9.53

Mihailo has 1 one dollar bill, 8 quarters, 5 nickels, and 4 pennies.
How much money does he have?

(Draw a picture to find your answer.)

answer: \$3.29

Chloe has 2 five dollar bills, 2 nickels, and 2 pennies.
How much money does she have?

(Draw a picture to find your answer.)

answer: \$10.12

Ethan has 6 one dollar bills, 4 quarters, 5 dimes, and 2 nickels.
How much money does he have?

(Draw a picture to find your answer.)

answer: \$7.60

Who has the least amount of money: Adam, Grace, Mihailo,
Chloe, or Ethan?

answer: Mihailo

Name: _____

Answer Key

Word Problems

Write the answers to the word problems below:

1	75¢	6	74¢
2	2 quarters	7	25¢
3	73¢	8	90¢
4	Kay	9	Answers will vary
5	15 nickels	10	Answers will vary